

Year 7 mathematics 2005

Mental mathematics test

First name _____

Last name _____

School _____

Total marks

Practice question

		95	
--	--	----	--

Time: 5 seconds

1		19 13	
---	--	-------	--

2		17	
---	--	----	--

3			
---	--	--	--

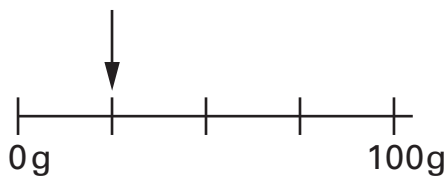
4		50% 60	
---	--	--------	--

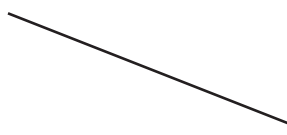
5		400	
---	--	-----	--

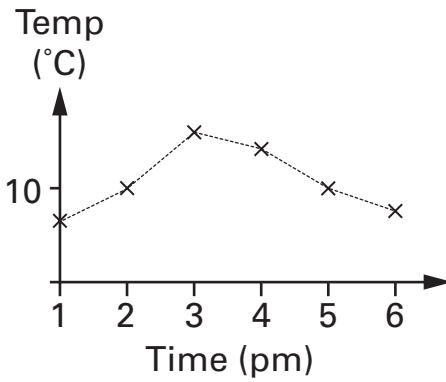
Time: 10 seconds

6	April						
	Mon	4	11	18	25		
	Tue	5	12	19	26		
	Wed	6	13	20	27		
	Thu	7	14	21	28		
	Fri	1	8	15	22		29
	Sat	2	9	16	23		30
	Sun	3	10	17	24		
					<input type="text"/>		

7		24	
----------	--	----	--


8			
	g		
		<input type="text"/>	

9			
	cm		
		<input type="text"/>	

10			
	pm		

Time: 10 seconds continued

11		$6 \times 5 - 7$	<input type="text"/>
-----------	--	------------------	----------------------

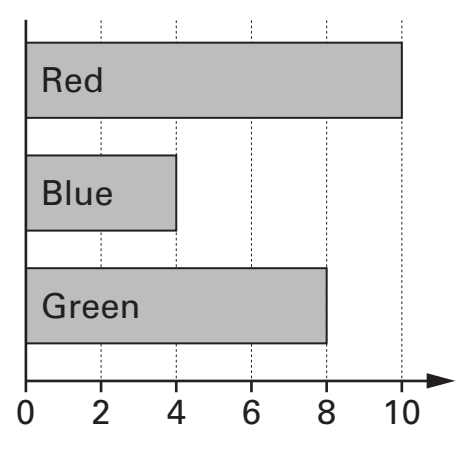
12		<input type="text"/>
	ml	<input type="text"/>

13	$^{\circ}\text{C}$	-8°C	<input type="text"/>
-----------	--------------------	----------------------	----------------------

14		36	<input type="text"/>
-----------	--	----	----------------------

15		$4y = 44$	<input type="text"/>
-----------	--	-----------	----------------------

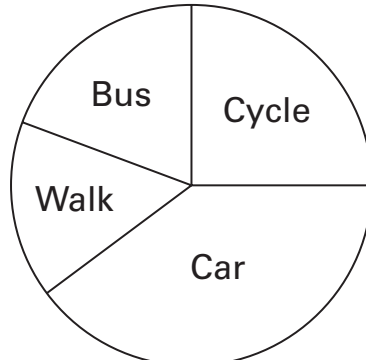
Time: 15 seconds

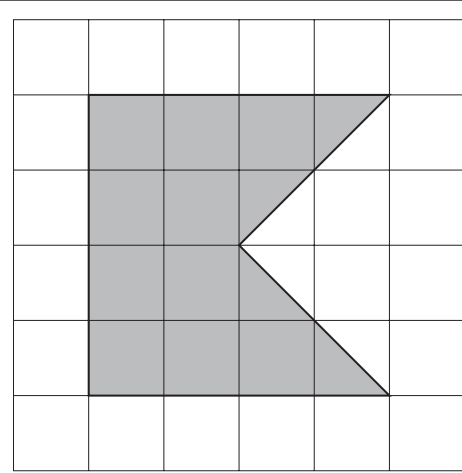
16		<input type="text"/>
	pupils	<input type="text"/>

Time: 15 seconds continued

17	<table border="1" style="margin: auto;"> <tr> <td style="width: 100px; text-align: center;">Pen</td> <td style="width: 100px; text-align: center;">30p</td> </tr> <tr> <td style="text-align: center;">Pencil</td> <td style="text-align: center;">25p</td> </tr> </table>	Pen	30p	Pencil	25p	<input type="text"/>
Pen	30p					
Pencil	25p					
	\pounds	<input type="text"/>				

18	33, 29, 25, 21, ..., ...	<input type="text"/>
		<input type="text"/>

19		<input type="text"/>
	$\%$	<input type="text"/>

20		<input type="text"/>
	cm^2	<input type="text"/>