

Year 7 mathematics 2004

Levels 3-4

Mental mathematics test

First name \_\_\_\_\_

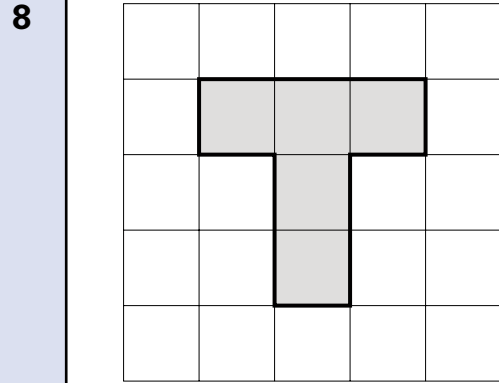
Last name \_\_\_\_\_

School \_\_\_\_\_

Total marks

Time: 10 seconds

7  days



Practice question

34

9

10  £20 50p

Time: 5 seconds

1

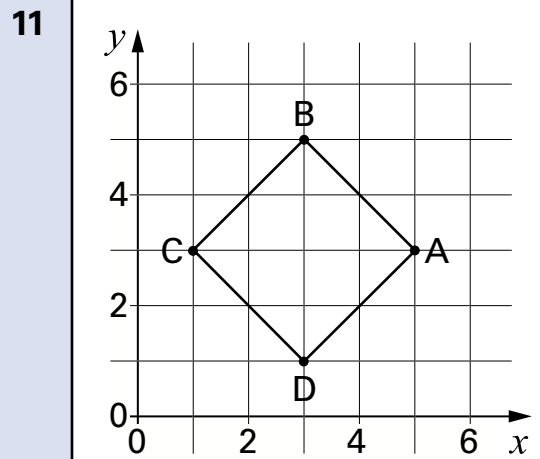
2  m  563m

3


4

5

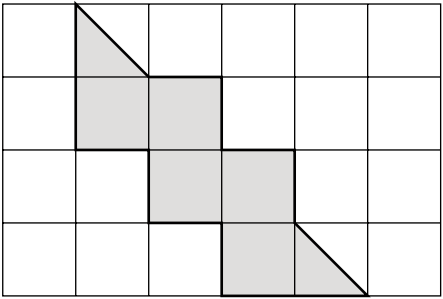
6



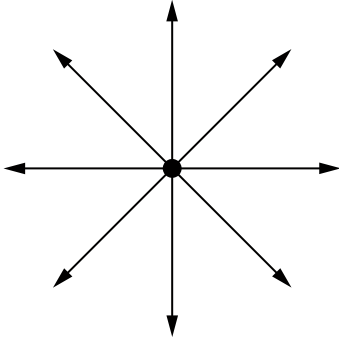
**Time: 10 seconds continued**

<b>12</b>	5 cm		cm	<input type="text"/>
	2 cm			

<b>13</b>	<input type="text"/>	<input type="text"/>
-----------	----------------------	----------------------

<b>14</b>		cm <sup>2</sup>	<input type="text"/>

**Time: 15 seconds**

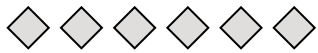

<b>15</b>	N		<input type="text"/>

<b>16</b>	<input type="text"/>	17 13 11 19	<input type="text"/>
-----------	----------------------	-------------	----------------------

<b>17</b>	Baker Road	12:23	<input type="text"/>
	Mill Street	12:34	
	Old Square	12:51	
	minutes		<input type="text"/>

<b>18</b>	<input type="text"/>	75	<input type="text"/>
-----------	----------------------	----	----------------------

<b>19</b>	<input type="text"/>	6	<input type="text"/>
-----------	----------------------	---	----------------------

<b>20</b>	Present		<input type="text"/>
	Absent		
	pupils		<input type="text"/>